






# AMAZING RACE



**Finish Point:** All competitors must finish by passing through Goroke Township. Your start at Goroke Township is calculated from the intersection of Natimuk-Francis Rd & Kiely St for route planning purposes.

<b>Code</b>	<p>Your last task card of the day will lead you to a electronic puzzle box. In order to 'crack the code' you must collect 4 answers gathered along the course of the day. These questions are in order of your route.</p> <p>a) on a very large tractor tyre on Old Mortat Rd use the third digit of the tyre size.</p> <p>b) On an intersection off Waites Rd, there is a cattle tag. Add the two numbers together to give give you the next code.</p> <p>c) At the next CFA station on your route, what is the seventh letter?</p> <p>d) On School Lane is a electicity pole with SW 27191 on it. What numeric month was this pole tagged?</p>	
<b>I</b>	<p>Your first task card can be found at 542309 / 5925848. Hint: (a) Enter the track to your task card at this sign. (b) Your task card can be found on the fence line.</p>	
<b>1</b>	<b>Q:</b> Who restored the Lake Ratzcastle toilets?	<b>10</b>
<b>2</b>	<b>Q:</b> Find Me Picture (answer must be in UTM WGS 84)	
<b>3</b>	<b>Q:</b> Fill in the Gaps. RWC _ _ _ _ _	<b>10</b>

4	Q: What road is incorrectly spelt on the map?	10
5	Q: What am I?	 10
6	Q: Find Me Picture (answer must be in UTM WGS 84)	 10
7	Q: '_____ Bio Link'?	10
I & Q	<p>Follow these instructions to plot your route until you get to your next task card. The GPS points and the Enter / Exit points are taken from your map, not from a GPS/ Computer or Compass.</p> <p>Start 510220 / 5921540 Exit to the N</p> <p><b>Q8:</b> Fill in the Gaps. 12 _ _</p> <p><b>Q9:</b> What number and suit on the 'playing card'?</p> <p>a) 508970 / 5926050 Enter from ESE Exit to W</p> <p>b) 507730 / 5926250 Exit to N</p> <p><b>Q10:</b> Find Me Picture (answer must be in UTM WGS 84)</p> <p><b>Q11:</b> What number and suit on the 'playing card'?</p> <p>c) 511355 / 5927975 Enter from SSE Exit NNW</p> <p><b>Q12:</b> What number and suit on the 'playing card'?</p> <p>d) 512570 / 5928850 Enter from S Exit N</p>	 50

13	Q: Write all three ways of spelling Lake Cha.....	10	
14	Q: How many holes are found on the flag pole?	10	
15	Q: Which 'playing card'?	10	
16	Q: At the GrainCorp site, what personal protective equipment is required?	10	
I	Immediately after 'Sheehans Hill' you must turn right.		
17	Q: Find Me Picture (answer must be in UTM WGS 84)		10
18	Q: Find Me Picture (answer must be in UTM WGS 84)		10
I	542345 / 5935840 Exit to NNW		



**COMPLETION TIME:** 4.00pm

**COURSE LENGTH:** 127 km